

25. Which one of the following statements is **NOT TRUE** about friction. Friction is a force that

- A. makes work difficult
- B. is reduced by treading tyres
- C. can be used to produce fire
- D. affect the speed of moving objects.

26. Which one of the following statements describe a human canine tooth?

- A. Chisel shaped with one root.
- B. Rough surface with two roots.
- C. Rough surface with three roots.
- D. Pointed tip with one root.

27. Which one of the following consists only of parts of the human body where digestion takes place?

- A. Mouth and stomach.
- B. Large intestines and mouth.
- C. Liver and stomach.
- D. Large intestines and liver.

28. Which one of the following statements about reproduction in human beings is **CORRECT**?

- A. Fertilization takes place in the uterus. ✗
- B. Ovulation always takes place twice in a month.
- C. Uterine wall contracts during birth.
- D. The embryo develops into a zygote. ✗

29. In which one of the following activities is water used for recreation?

- A. Watering plants.
- B. Cooking.
- C. Washing clothes.
- D. Swimming.

30. In which one of the following is water used sparingly?

- A. Using domestic waste water to clean toilets.
- B. Turning off water taps after use.
- C. Recycling waste water from factories.
- D. Using harvested rain water for animals to drink.































31. When constructing a windvane the

- A. pointer should be fixed on a short stand
- B. pointer should be firmly held to the stand
- C. pointer should be made of cardboard
- D. tail of the pointer should be larger than arrow head.






32. Which one of the following groups of planets are in the **CORRECT** order in terms of distance from the sun?

- A. Venus, Mars, Earth.
- B. Earth, Saturn, Jupiter.
- C. Jupiter, Saturn, Uranus.
- D. Mars, Neptune, Uranus.

33. The diagram below represents a weather chart prepared by pupils.

DAY	MORNING	MID-MORNING	AFTERNOON
Monday	 	 	 
Tuesday	 	 	 
Wednesday	 	 	 
Thursday	 	 	 
Friday	 	 	 

KEY:

	Sunny
	Cloudy
	Rainy
	Windy
	Calm

Which one of the following statements is **CORRECT** about the weather chart?

- A. Whenever it was sunny it was also calm at the same time.
- B. It only rained after calm conditions. ✗
- C. Whenever it was rainy it was also windy at the same time. ✓
- D. It rained only in the afternoons. ✗