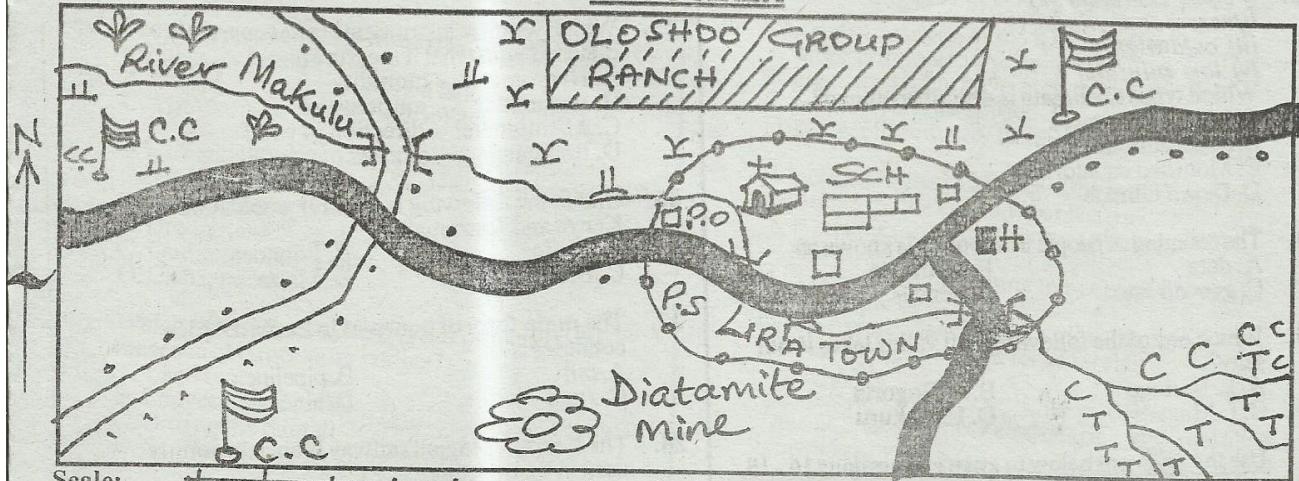


OLOO AREA



Scale:

KEY:

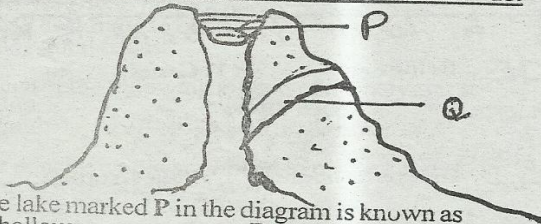
- | | | | | | | | |
|--|--------------|--|-------------------|--|----------------|--|----------------|
| | Tarmac road | | Murrum road | | Bridge | | Grass |
| | Scrubs | | Coffee | | Tea | | Sisal |
| | Chief's camp | | Human settlement | | Diatomite mine | | Police station |
| | Post office | | Governor's office | | Hospital | | Church |
| | School | | | | | | |

Study the map of Oloo area and answer question 1-7.

- River Makulu flows from _____ to _____.
 A. North west, south east
 B. South east, north west
 C. South west, south west
 D. North east, south east
- Which religion do residents of Lira town belong to?
 A. Hinduism
 B. Judaism
 C. Islam
 D. Christianity
- Which of the following economic activities is **not** being carried out in the area represented by the map?
 A. Mining
 B. Pastoralism
 C. Trade
 D. Lumbering
- Which one of the following can be the **main** factor that led to growth of Lira town?
 A. Presence of road junction
 B. Availability of rainfall
 C. Presence of police station
 D. Presence of mining activities
- What is the direction of the sisal plantation from the source of the river?
 A. South East
 B. North East
 C. North West
 D. South West
- Who among the following leaders is elected to represent the people of Oloo in the parliament?
 A. Governor
 B. Speaker
 C. Senator
 D. Member of parliament
- The **main** economic activity in the North part of Oloo area is likely to be
 A. lumbering
 B. trading
 C. pastoralism
 D. mining
- Who among the following people does **not** belong to the river lake - nilotes?
 A. Acholi
 B. Luo
 C. Maasai
 D. Anuak
- The **main** economic activity of the cushites was
 A. farming
 B. livestock keeping
 C. fishing
 D. trading
- Which one of the following mountains is **not** an examples of a block mountain?
 A. Usambara
 B. Pare
 C. Meru
 D. Ruwenzori

11. Which one of the following shows a feature found in Sudan?
A. Lorian swamp B. Fipa plateau
C. Bahr - el - Ghazal D. Shebelle
12. Which one of the following is the main problem affecting forests in Kenya?
A. Drought B. Pests
C. Deforestation D. Fires
13. i) clear cloudless sky
ii) very hot daytime
iii) cold nights
iv) low rainfall
Which types of climate is described above?
A. Modified tropical
B. Mountain climate
C. Modified equatorial
D. Desert climate
14. The counting of people in a country is known as
A. data B. birth rate
C. growth rate D. census
15. Which one of the following Rift valley lakes is not salty?
A. L. Baringo B. L. Bogoria
C. L. Magadi D. L. Nakuru

Use the diagram below to answer questions 16 - 18.

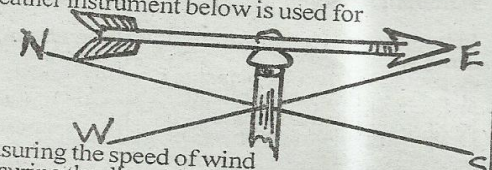


16. The lake marked P in the diagram is known as
A. hollow B. crater
C. ox-bow D. vent
17. The park marked Q is known as
A. dyke B. lava
C. vent D. pipe
18. Which of the following mountains was not formed as a result of the process above?
A. Mt Kilimanjaro B. Mt Rungwe
C. Mt Ras Dashen D. Mt Longonot
19. Which one of the following is the source of Blue Nile?
A. Ethiopian highlands B. Lake Victoria
C. Lake Tana D. Danakal Alps
20. A map should have all the following except
A. key B. title
C. scale D. colour
21.

Keiyo	Terik	x	Kipsigs
-------	-------	---	---------

Which East Africa community is represented by letter x?
A. Sebei B. Njemps
C. Luo D. Pokomo
22. Afforestation is
A. planting of trees together with crops
B. planting trees none existed before
C. planting trees where they have been cut
D. government setting up forests as forest reserves

23. The area which lies below the sea level in Ethiopia is known as
A. Jebel Mara B. Bahr - el - Ghazal
C. Dallo D. Aluba
24. What is the minimum age required in order for a Kenya citizen to vote?
A. 21 years B. 18 years
C. 20 years D. 35 years
25. Which weather instruments is not correctly matched with what it measure?
A. Hygrometer - humidity
B. Barometer - air pressure
C. Anemometer - direction of wind
D. Raingauge - amount of rainfall
26. One of the following is a major staple food in Kenya and Tanzania?
A. Coffee B. Potatoes
C. Bananas D. Maize
27. The main form of transport in Eastern Africa countries is
A. rail B. pipeline
C. road D. air
28. The Konza - Magadi railway branch is mainly used in transporting
A. sisal B. soda ash
C. diatomite D. fluorspar
29. There is a floating vegetation along River Nile in Sudan known as
A. hyacinth B. the sudd
C. reeds D. papyrus
30. One of the following is not a responsibility of children on a family. Which one is it?
A. Obeying their elders
B. Working hard in school
C. Taking care of family property
D. Providing the basic needs
31. Population distribution in Africa is mainly influenced by
A. political factors B. climate
C. relief D. security
32. Which one of the following is not a result of lawlessness in the society?
A. Loss of lives
B. Destruction of property
C. Shortage of food
D. Stealing
33. Who among the following is not elected during the general elections in Kenya?
A. President B. Governor
C. Chief justice D. County representative
34. Which one of the following is a secondary need of a family?
A. Food B. Clothing
C. House D. Radio
35. The lakes that fishing takes place in Kenya are
A. Baringo and Bogoria
B. Naivasha and Turkana
C. Nakuru and Elementaita
D. Magadi and Naivasha

36. Which one of the following Eastern Africa countries is **correctly** matched with its capital city?
 A. Ethiopia - Khartoum B. Eritrea - Asmara
 C. Eritrea - Addis Ababa D. Somalia - Arusha
37. In the past, the **main** form of interaction among the communities was
 A. intermarriage B. games and sports
 C. trade D. festivals
38. People of the same age who were initiated together **traditionally** formed
 A. a clan B. a family
 C. a generation D. an age -group
39. Which one of the following was **not** a reason for the Cushites migration from their original homeland?
 A. Search for fertile land
 B. Drought and famine
 C. Outbreak of diseases
 D. Clan quarrels
40. Which one of the following is **not** influenced by presence of large water bodies?
 A. Land breeze
 B. Convectonal rainfall
 C. Orographic rainfall
 D. Sea breeze
41. A raised part of the ground which has an almost level surface is a
 A. plain B. highland
 C. valley D. plateau
42. River blue Nile rises from
 A. Ethiopian highlands B. Lake Victoria
 C. Lake Tana D. Kenyan highlands
43. Which one of the following lakes was formed as a result of down warping?
 A. Lake Tanganyika B. L. Kyoga
 C. L. Kivu D. L. kanyaboli
44. The weather instrument below is used for

 A. measuring the speed of wind
 B. measuring the direction of wind
 C. measuring amount of water vapour
 D. measuring air pressure
45. The special shrines for worship by the Mijikenda community were known as
 A. caves B. kayas
 C. tombs D. mosque
46. The **main** purpose of education in the traditional African society was to
 A. enable the youth to learn to perform domestic chores
 B. prepare the youth for a full life
 C. teach the youth about their customs and traditions
 D. enable the youth to read and write
- The best soil for irrigation farming and fish farming is
 A. black cotton soils B. volcanic soils
48. C. young soils D. loam soil
 The latitude marked 0° passes through the following towns **except**?
 A. Embu B. Maseno
 C. Hagadera D. Solai
49. The steeper walls of the Rift valley are known as
 A. faults B. ridges
 C. anticlines D. escarpment
50. The **main** function of the Kenya police is to
 A. arrest criminals
 B. guard important government officials
 C. maintain law and order
 D. protect the country from external attack
51. Which one of the following is the **main** importance of tourism to the economy of Kenya?
 A. It creates job opportunities to marry Kenyans
 B. It is a source of income to people who work in the parks
 C. It promotes development of infrastructure
 D. It earns the country a lot of foreign exchange
52. The national assembly consists of _____ members of parliament.
 A. 290 B. 349
 C. 12 D. 350
53. Which one of the following forms of communication was not used in eastern Africa before coming of the European?
 A. Mobile phones B. Drums
 C. Smoke signals D. Horns
54. The laws that are made by the parliament are implemented by the
 A. judiciary B. legislature
 C. executive D. chief justice
55. Who among the following is **not** a members of the cabinet in Kenya?
 A. Attorney general
 B. Deputy president
 C. Cabinet secretary
 D. Chief justice
56. The chief legal advisor to the government of Kenya and to the president of Kenya is the
 A. chief justice B. attorney general
 C. deputy president D. speaker
57. The **main** reason why the government of Kenya encourages citizens to preserve forests is that
 A. forests provide source of employment
 B. forests provide timber for construction
 C. forests are water towers
 D. forests are home for wild animals
58. Who among the following collaborated with the British during the colonials periods?
 A. Nabongo Mumia
 B. Koitalel Arap Samoei
 C. Mukite wa Nameme
 D. Mekatilili wa Menza
59. Lake Bogoria is famous for
 A. flamingoes B. soda ash
 C. hot springs D. irrigation schemes

60. The Bill of rights is contained in the _____ of Kenya.
 A. manifesto B. constitution
 C. education act D. syllabus

SECTION II C.R.E

61. What did God create on the fifth day according to the Genesis story of creation?
 A. Land animals and human beings
 B. Sun, moon and star
 C. Earth, sea and vegetables
 D. Sea creatures and birds
62. Which one of the following is a way of taking care of God's creation?
 A. Killing all harmful wild animals
 B. Overworking donkeys
 C. Cutting down trees
 D. Feeding animals
63. God called Abraham when he was living in
 A. Midian B. Egypt
 C. Haram D. Canaan
64. Which of the following is a sign of new life Christ?
 A. Initiation
 B. Going to Church
 C. Baptism
 D. Helping the needy
65. Who among the following is a good neighbour?
 A. One who lived next your house
 B. Anyone who helps a needy person
 C. My deskmate in class
 D. My good friend
66. Which of the following is a gift of the holy spirit?
 A. Joy B. Peace
 C. Faith D. Patience
67. The apostle who was chosen to replace Judas Iscariot was called
 A. Nathaniel B. Andrew
 C. Mathias D. Levi
68. Where did the disciple wait to received the Holy Spirit?
 A. Jerusalem B. Galilee
 C. Antioch D. Bethany
69. Who was the father of Samuel?
 A. Eli B. Moses
 C. Jacob D. Elkanah
70. The resurrection of Jesus teaches Christian to be
 A. honest B. obedient
 C. hopeful D. tolerant
71. The Luhya community call their God
 A. Nyasaye B. Were
 C. Enkai D. Asis
72. Jesus told the blind man to wash his face in a pool called
 A. Galilee B. Judea
 C. Siloam D. Jordan
73. Who among the following committed murder and also coveted someone's wife?
 A. Hosea B. David
 C. Solomon D. Naboth
74. The Bible has _____ books.
 A. 64 B. 27
 C. 39 D. 66
75. Jesus was crucified at a place known as
 A. Bethel B. Calvary
 C. Luz D. Carpenaum

76. Which miracle did Jesus perform at Cana of Galilee?
 A. Changing water into milk
 B. Changing water into wine
 C. Healing a paralysed woman
 D. Healing a blind young man
77. The home of Lazarus was at
 A. Galilee B. Jerusalem
 C. Bethany D. Jericho
78. Three of the following are social evils except
 A. unity B. ethnicity
 C. tribalism D. racism
79. Emmanuel means
 A. God with Israel B. God with Jesus
 C. God with others D. God with us
80. The first five books have the following names except
 A. books of Moses B. books of law
 C. historical books D. pentateuch
81. What are abilities?
 A. Spiritual gifts
 B. Things we are able to do
 C. Things we enjoy doing or paying attention to
 D. donations
82. Which of the following best shows love?
 A. Working together
 B. Sharing things with the needy
 C. Walking together in peace
 D. Living together in peace
83. Christians who for their strong belief are known as
 A. reforms B. martyrs
 C. rebels D. criminals
84. The Israelites celebrated their first Passover in
 A. wilderness B. Canaan
 C. Egypt D. Mt Sinai
85. All the following gifts were presented to baby Jesus by the wisemen except
 A. gold B. silver
 C. frankincense D. myrrh
86. In traditional African society education was mainly aimed at
 A. moulding the character
 B. one acquiring a certificate
 C. one getting a good job
 D. making one to be obedient
87. What did Jesus require from the people He healed?
 A. Patience B. Hope
 C. Earth D. Respect
88. Who among the following was not raised to life by Jesus?
 A. Son of the widow of Nain
 B. Jairus of Bethany
 C. Jairus daughter
 D. Tabitha or Dorcas of Joppa
89. Missionaries mainly came in Eastern Africa to do
 A. trade
 B. spread the gospel
 C. abolish African culture
 D. colonize
90. Jesus was baptised in river
 A. Nile B. Tugris
 C. Jordan D. Gishon