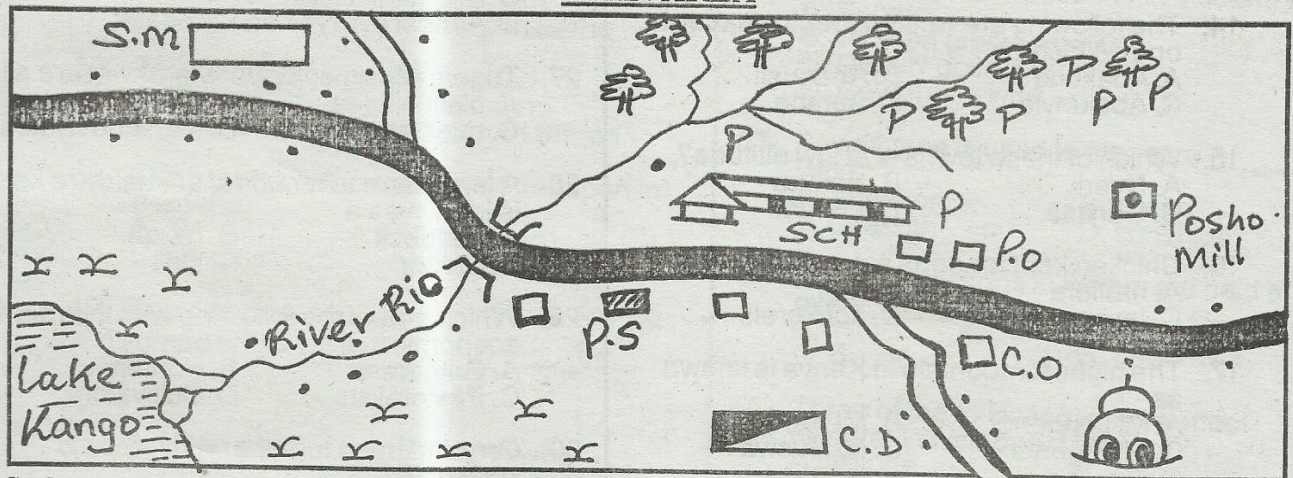


SOCIAL STUDIES & C.R.E

TIME: 2HRS 15 MINS

MIAN AREA



Scale:

KEY:

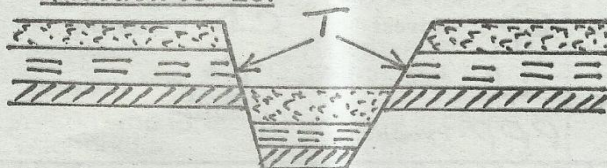
	Tarmac road		Murram road		Forest		Cattle Dip
	Police station		Post office		County offices		Mosque
	Bridge		School		Pyrethrum		

Study the map of Mian area and answer question 1-7.

- River Rio flows from
 - North west
 - South west
 - North east
 - South east
- The presence of police station show that there is _____ in Mian area.
 - many thieves
 - security
 - government office
 - people
- Most people in Mian area are _____
 - pastralists
 - mixed farmers
 - Christians
 - no jobs
- Which of the following crops are grown in the area?
 - Coffee and pyrethrum
 - Cocoa and tea
 - Maize and pyrethrum
 - Sugarcane and banana
- Mian area is **most** likely to a
 - division
 - location
 - district
 - country
- The climate to the South west of Mian area is likely to be
 - hot and dry
 - cool and wet
 - cold and dry
 - rainy
- Most people in Mian area worship on
 - Sunday
 - Friday
 - Saturday
 - Thursday
- In traditional African society, an age - set usually composed of
 - many age - groups
 - many families
 - many clans
 - many societies
- Which of these rivers has its source from mount Elgon?
 - River Ewaso Nyiro north
 - River Turkel
 - River Nyando
 - River Tana
- Which of these lakes is a fresh water lake found in the Rift valley?
 - L. Baringo
 - L. Magadi
 - L. Bogoria
 - L. Elementaita
- Which of the following communities is **correctly** matched with its area of origin?
 - Akamba - Bar-el-ghazel
 - Luo - Congo forest
 - Keiyo - Shungwaya
 - Galla - Horn of Africa

12. One of the following rivers flow into the Indian - ocean. Which one is it?
A. River Nzola B. River Sio
C. River Athi D. River Suguta
13. Which one of the following is the **main** tourist attraction in Kenya?
A. Wildlife B. Flowers
C. Warm climate D. Sandy beaches
14. The following are western bantus **except** one. Which one is it?
A. Abakuria B. Abagusii
C. Abaluhya D. Aembe
15. Which of these towns is at low altitude?
A. Nyeri B. Nakuru
C. Garissa D. Limuru
16. Chicken kept for eggs are called
A. broilers B. hen
C. layers D. cockerels
17. The highest mountain in Kenya is known as
A. Mt Longonot B. Mt Kenya
C. Mt Elgon D. Mt Suswa

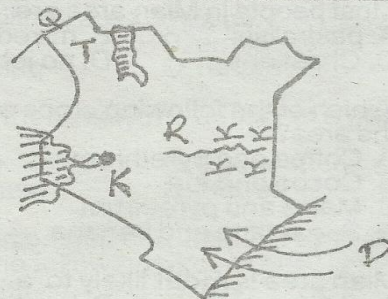
Use the diagram below to answer question 18 - 20.



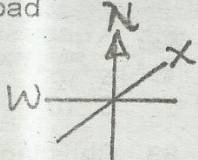
18. The above feature is known as
A. rift valley B. block mountain
C. hollow D. escarpment
19. The parts shown by letter T are known as
A. valleys B. uplifts
C. faults D. escarpments
20. The above feature was formed through
A. blocking B. folding
C. volcanicity D. faulting
21. Which of these **cannot** use road transport?
A. Motorcycles B. Dhows
C. Cars D. Bicycles
22. Census is carried out in our country after every _____ years.
A. 5 B. 10
C. 12 D. 20
23. The **best** soil for growing crops is
A. clay B. loam
C. sandy D. any
24. Which of these is a dairy breed of cattle?
A. Charolais B. Boran
C. Hereford D. Ayrshire

25. In traditional societies, special skills for people who wanted to be medicine people were taught through
A. apprenticeship B. writing
C. reading D. riddles
26. Where are the mangrove trees found?
A. In the lake basin
B. In the highlands
C. Along the coast
D. Almost everywhere in Kenya
27. Tugen, Kipsigis, Keiyo, Marakwet are all
A. plain nilotes B. eastern bantus
C. river lake nilotes D. highland nilotes
28. A large farm where beef animals are kept is known as a
A. paddock B. ranch
C. fodder D. stall
29. Which one of the following was the **main** economic activity of the bantus?
A. Gatherers B. Hunters
C. Pastoralists D. Cultivators
30. Growing trees together with crops is known as.
A. agriculture B. deforestation
C. agroforestry D. reforestation
31. The counties are headed by
A. high communities
B. country commissioner
C. district commissioner
D. governor
32. How many president has Kenya had since independence?
A. 3 B. 4
C. 5 D. 7
33. The **least** reason for the migration of communities in the past was
A. external attacks B. adventure
C. drought D. famine

Use the map below to answer question 34 - 38.



34. The river marked R is known as
A. Ewaso Nyiro North
B. Ewaso Nyiro South
C. Lorian
D. Yalla

35. The town marked K is called :-
 A. Bondo B. Dala
 C. Kisumu D. Nakuru
36. The language group that used the route marked D is called
 A. bantu B. cushites
 C. semites D. nilotes
37. The plain marked T is known as
 A. Kaputei B. Lotikipi
 C. Awara D. Uasin Gishu
38. The country marked Q is called _____
 A. Ethiopia B. Sudan
 C. Uganda D. South Sudan
39. The most common means of transport in Kenya is
 A. air B. water
 C. animals D. road
40. The direction marked x is

 A. North east B. North west
 C. South D. South east
41. Mount Kenya has a height of
 A. 5199 m B. 4321 m
 C. 7119 m D. 4300m
42. The height above the sea level is known as
 A. latitudes B. relief
 C. length D. altitude
43. A chain of mountains or hills is known as a
 A. plateau B. range
 C. crater D. plain
44. The climate of the lake basin is
 A. cool and dry B. hot and dry
 C. hot and wet D. cold and wet
45. Crops grown mainly for sale are called
 A. sale crops B. cash crops
 C. food crops D. horticulture
46. The largest plateau in Kenya is known as
 A. Yatta plateau B. Sirikwa plateau
 C. Bilesa plateau D. Nyika plateau
47. How many counties does Kenya have?
 A. 8 B. 290
 C. 47 D. 58
48. _____ is a way of people's life
 A. Lifestyle B. Sports
 C. Clan D. Culture
49. Which of the following means of transport was used traditionally?
 A. Water B. Air
 C. Railway D. Cables

50. The ruling coalition in Kenya is
 A. CORD B. JUBILEE
 C. KANU D. NARC
51. The head of states in Kenya is the
 A. Prime minister B. Uhuru Kenyatta
 C. President D. King
52. Who assists the governor in a country?
 A. Senator B. Women representative
 C. Deputy governor D. Governor's wife
53. A windvane is used to measure _____ of wind.
 A. direction B. speed
 C. strength D. sunshine
54. General elections in Kenya are held after every _____ years.
 A. 10 B. 12
 C. 5 D. 20
55. Three of the following factors affect climate. Which one does not?
 A. altitude B. winds
 C. longitude D. latitudes
56. The main tourists attractions along the coast is
 A. mangrove forests B. Arab settlements
 C. sandy beaches D. wildlife
57. Which of these countries is not correctly matched with its headquarters?
 A. Kiambu - Nairobi
 B. Machakos - Machakos
 C. Kisumu - Kisumu
 D. Busia - Busia
58. The main source of revenue for the government is
 A. tax B. fines
 C. sadaka D. grants
59. Who among the following was the second President of Kenya?
 A. Kenyatta Jomo B. Daniel Moi
 C. Uhuru Kenyatta D. Raila Odinga
60. The next counting of people in our country will be conducted in which year?
 A. 2020 B. 2016
 C. 2019 D. 2017
- SECTION II C.R.E**
61. _____ was raised by Jesus from dead.
 A. Peter B. Andrew
 C. Dorcas D. Lazarus
62. The two sons of Isaac were
 A. Esau and Enoch B. Seth and Cain
 C. Abel and Cain D. Esau and Jacob

63. Who among the following was Moses spokesman to the king of Egypt?
A. Aaron B. Caleb
C. Joshua D. Amron
64. When Jesus washed his disciples feet He showed
A. honest B. selfishness
C. humility D. disrespect
65. "I am fearfully and wonderfully made, These words are found in the book of
A. Matthew B. Deutronomy
C. Psalms D. Luke
66. In which book of the Bible do we get the story of creations?
A. Exodus B. Genesis
C. Revelation D. Mathew
67. Where did Jesus go to worship?
A. Temple B. Mosque
C. Shrine D. Church
68. _____ was the father to Abraham.
A. Moses B. Ur
C. Haran D. Terah
69. Who among the following people visited Jesus at night?
A. Barnabas B. Nicodemus
C. Simon D. Aramathea
70. A person who foretells the future is called
A. witchdoctor B. prophet
C. scientist D. magician
71. After God created heaven and the earth, he told _____ to rule over all creatures.
A. Jesus B. Angels
C. The Holy spirit D. Man
72. People aged between 12 and 17 years are called
A. children B. adults
C. adolescents D. men
73. Jacob had _____ sons.
A. 10 B. 11
C. 12 D. 8
74. _____ denied Jesus three times.
A. Judas Iscariot B. Peter
C. Pilate D. James
75. The other name for Mathew was
A. John B. Levi
C. James D. Zachaeus
76. Jesus is also known as the prince of
A. love B. peace
C. jealousy D. happiness
77. Jesus's first disciples were
A. fishermen B. farmers
C. preachers D. teachers
78. Who is your neighbour? One who is
A. next to you B. a Church follower
C. a Christian D. in need
79. _____ life starts when we have faith in Jesus and it has no end.
A. External B. Wealthy
C. Spiritual D. Eternal
80. A sermon agreement between two parties which should not be broken is called
A. covenant B. union
C. love D. bond
81. Which word means community of believers?
A. Jesus B. Salvation
C. Church D. Emmanuel
82. A baby stays in the mothers womb for _____ months.
A. 12 B. 9
C. 10 D. 14
83. Christians should show love, be kind and forgive even their
A. enemies B. friends only
C. parents only D. Christians only
84. How can you discourage peace in your community?
A. By being humble
B. By stealing other people's property
C. By being kind
D. By being honest
85. Which of the following will help us **not** to make wrong choices?
A. Love B. Selfishness
C. Hatred D. Greed
86. Irresponsible sexual relationships can lead to
A. being a celebrity
B. dropping out of school
C. quick thinking
D. being mature
87. Strong feelings are known as
A. love B. emotions
C. reasoning D. hatred
88. Which of these is **not** a quality of a good friend?
A. Honest B. Respect
C. Dishonest D. Hatred
89. Good relationship can be destroyed by three of the following **except** one.
A. quarrels B. lies
C. hatred D. forgiveness
90. A good leader is
A. just and impatient
B. unkind and selfless
C. peaceful and proud
D. fair and just